

Happy Wednesday Year One! 😊

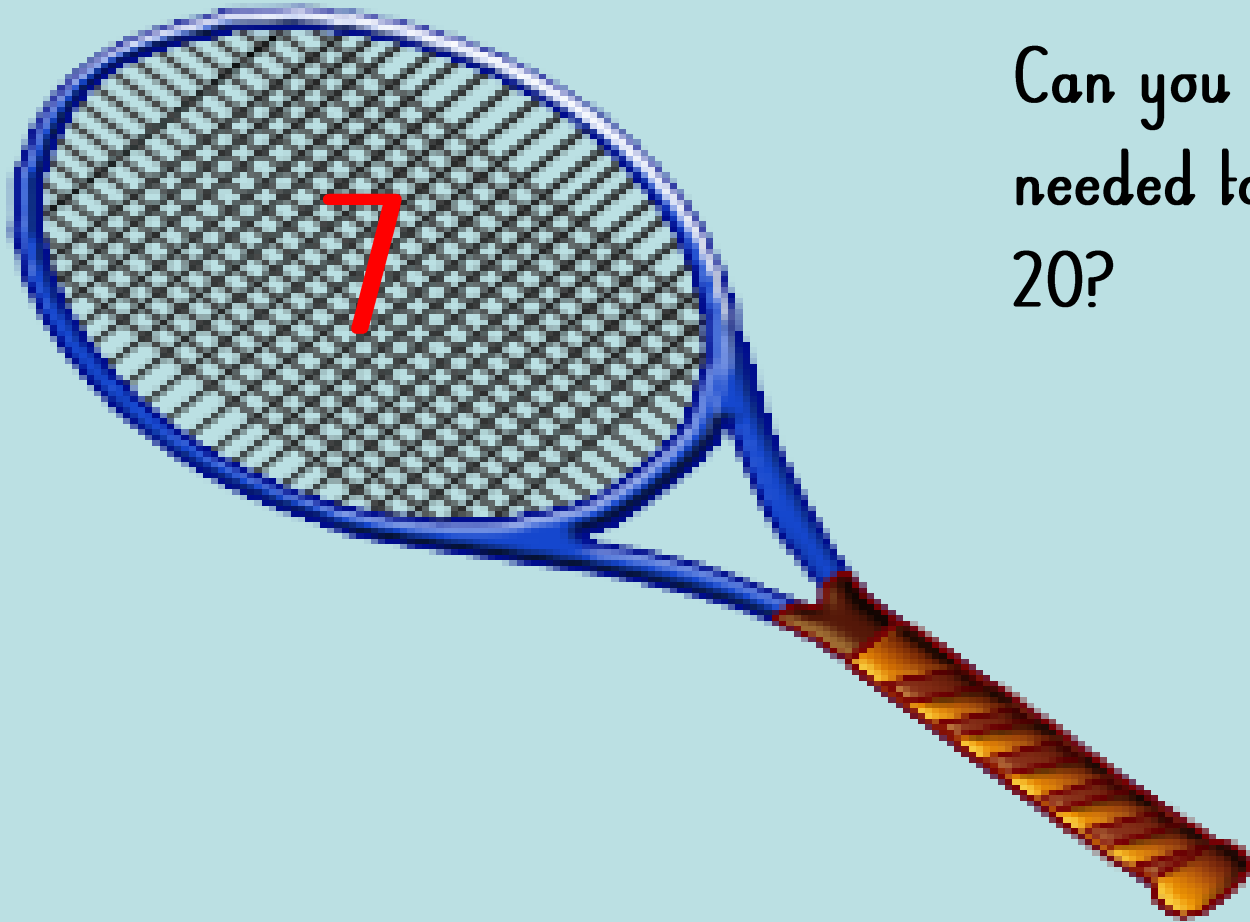
As always, it is not necessary to print out all of these slides so please read them through carefully so you can decide exactly which are needed as a paper copy.

Thank you.

Session 3

OMS: Number  
bonds to 20

2



Can you work out the number  
needed to add to 7 to make  
20?







**WALT:** Solve one-step problems that involve subtraction using concrete objects.

Solve the sum below practically using buttons/marbles and check the answer using a number line.  
(Pentagons & Hexagons to use family facts to check answers rather than a number line.)

$$16 - 5 =$$



**My 0 to 30 Number Line**



0 1 2 3 4 5 6 7 8 9 10 11 12 13 14 15 16 17 18 19 20 21 22 23 24 25 26 27 28 29 30



**WALT:** Solve one-step problems that involve subtraction using concrete objects.

Solve the sum below practically using buttons/marbles and check the answer using a number line.  
(Pentagons & Hexagons to use family facts to check answers rather than a number line)

$$20 - 7 =$$




**WALT:** Solve one-step problems that involve subtraction using concrete objects.

Solve the sum below practically using buttons/marbles and check the answer using a number line.

(Pentagons & Hexagons to use family facts to check answers rather than a number line.)

$$18 - 3 =$$





Chose two number balls to make a subtraction sentence.

Write your number sentences. **Remember the biggest number comes first!**

Solve it practically using counters or something similar and check the answer using a number line. **Repeat.**

8

7

0

12

10

5

3

6






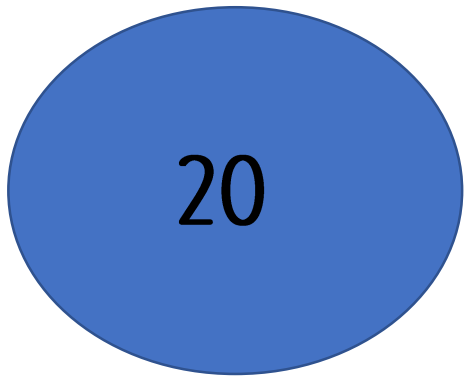


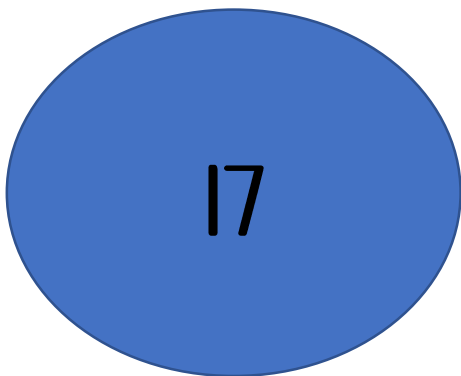



Chose two number balls to make a subtraction sentence.

Write your number sentences. **Remember the biggest number comes first!**



Solve it practically using counters or something similar and check the answer using a number line. **Repeat.**




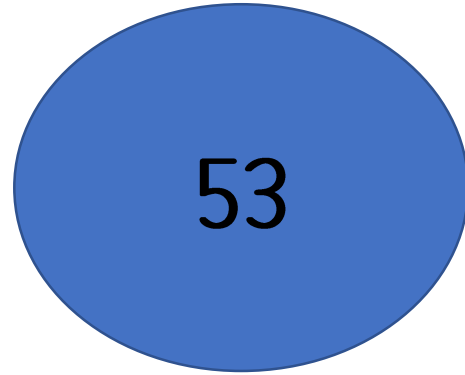
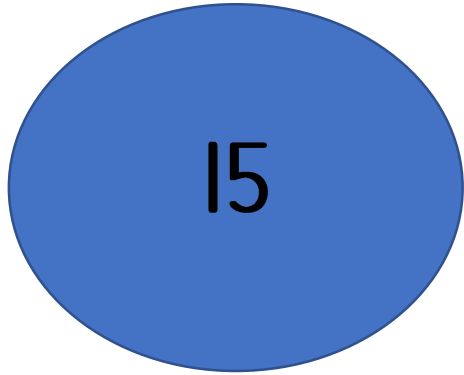
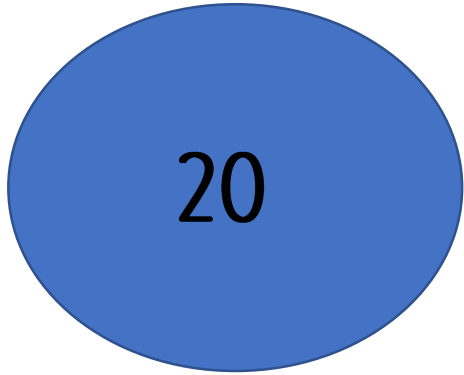
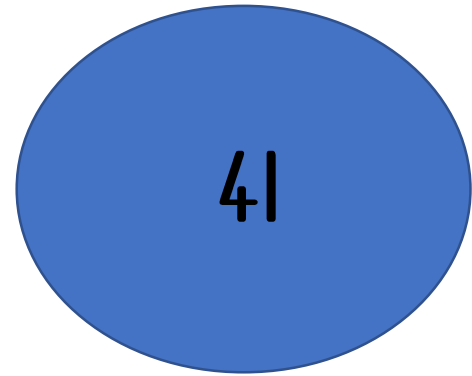


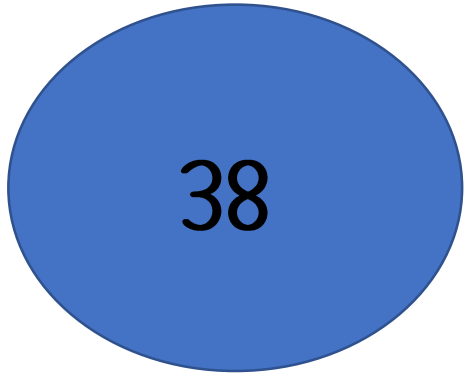


Chose two number balls to make a subtraction sentence.

Write your number sentences. **Remember the biggest number comes first!**



Solve it using a number line or 100 square. Can you check your work using family facts? **Repeat**



# My 0 to 30 Number Line



1		3	4	5	6		8	9	10
11		13	14		16	17	18		20
21	22		24	25	26		28	29	30
31	32	33	34	35	36	37	38	39	
	42		44		46	47	48	49	50
51	52	53	54	55	56	57		59	60
61		63		65		67	68	69	
71	72		74	75	76		78	79	80
	82	83	84		86	87	88	89	90
91	92		94	95		97	98		100

(If needed)

## Plenary: Topmarks Subtraction train

Click on the subtraction truck and then click on the "Up to 20 minus Single-Digit."



<https://www.topmarks.co.uk/maths-games/mental-maths-train>